









US STATES AND CAPITALS

Learn the names and map locations of some of the states in the United States.
First look carefully at the map, then do the activities.

Activity 1 → Look at the pictures and write the corresponding states.

	_____		_____
	_____		_____
	_____		_____
	_____		_____

Activity 2 → Read and answer.

Find the names of five states using a point of the compass. → _____ → _____

→ _____ → _____ → _____

How many states have the word "NEW" in their names? _____

→ _____ → _____

→ _____ → _____

Write three states that are also girls' names.

→ _____ → _____ → _____

Find the only state beginning with the letter U. → _____

Write the state that rhymes with Texas. → _____ → _____

Find the state named after the first US President. → _____

I am currently visiting *Mount Rushmore National Memorial with the heads of four US Presidents.*

In which state am I? _____

I am currently visiting *Los Angeles, Hollywood, the Walk of Fame.* In which state am I? _____

These states have the name of a river. → C _____ → M _____

→ O _____ → M _____

Activity 3 → Look at the outline map and identify the state.

	•	• Florida •	•	
	•	• Alaska •	•	
	•	• New York •	•	
		• Hawaii •		
		• California •		
		• Texas •		

Activity 4 → Match the states with their capitals.

Oklahoma ○ Pennsylvania ○
 Hawaii ○ Kentucky ○ Indiana ○
 Florida ○ New Mexico ○ Utah ○
 Louisiana ○ Arkansas ○

1. Tallahassee
2. Honolulu
3. Oklahoma City
4. Santa Fe
5. Baton Rouge
6. Indianapolis
7. Salt Lake City
8. Little Rock
9. Harrisburg
10. Frankfort

Activity 5 → Match each state with its nickname and its capital.

	<u>Nickname</u>	<u>State</u>	<u>Capital</u>
	The Grand Canyon State •	• Wyoming •	• Lansing
	The Beaver State •	• Arizona •	• Salem
	The Great Lake State •	• Oregon •	• Phoenix
	The Cowboy State •	• Michigan •	• Cheyenne

Activity 6 → This is the capital, arrange the letters in the right order and find the state.

Montgomery, AAAAMBL → _____

Montpelier, TVNEOMR → _____

Augusta, AIEMN → _____

Des Moines, WAIO → _____

Activity 7 → Read and find the capital.

Ohio : its capital is named after the explorer who discovered America in 1492.

→ _____

Nebraska : its capital is named after the 16th US president whose first name is Abraham.

→ _____

Missouri : its capital is named after the 3rd US president whose first name is Thomas.

→ _____ city.

Activity 8 → Tick the correct capital.

California	Colorado	Massachusetts	New York
<input type="checkbox"/> Sacramento	<input type="checkbox"/> Sacramento	<input type="checkbox"/> Sacramento	<input type="checkbox"/> Sacramento
<input type="checkbox"/> Boston	<input type="checkbox"/> Boston	<input type="checkbox"/> Boston	<input type="checkbox"/> Boston
<input type="checkbox"/> Columbia	<input type="checkbox"/> Columbia	<input type="checkbox"/> Columbia	<input type="checkbox"/> Columbia
<input type="checkbox"/> Denver	<input type="checkbox"/> Denver	<input type="checkbox"/> Denver	<input type="checkbox"/> Denver
<input type="checkbox"/> Albany	<input type="checkbox"/> Albany	<input type="checkbox"/> Albany	<input type="checkbox"/> Albany

THE UNITED STATES OF AMERICA

